

Kindergarten

Assignment

Packet

LP4

Ms. Wilson

**Kindergarten Language Arts Assignments**  
**LP4 (1/23/17 - 3/3/17)**  
**Excursions Lessons (19-24)**

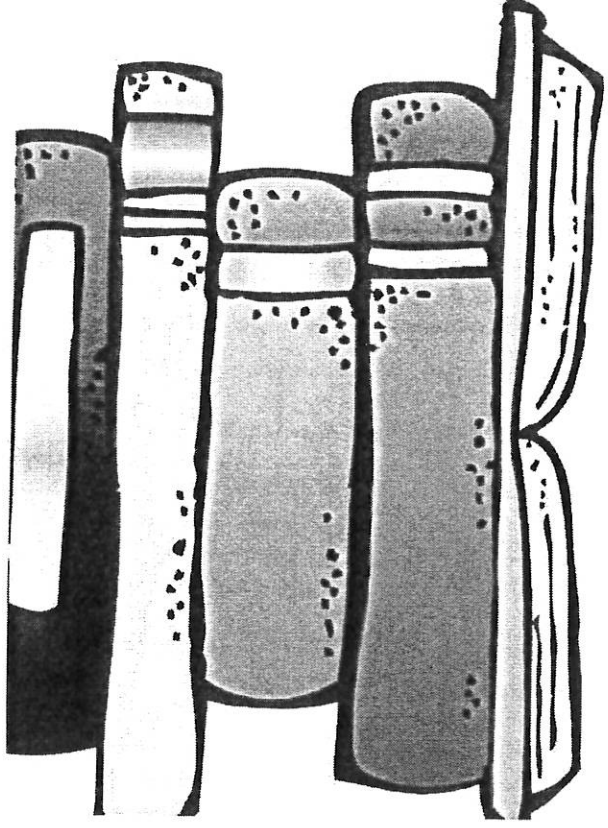
**Assignments**

1. Practice letters and sounds daily for at least 15 minutes (using flashcards, games, etc.)
2. Read daily for at least 20 minutes
3. Read blue decodable phonics readers (19-24 - one per week)
4. Complete excursions lessons in teacher's edition for lessons 19-24 (Days 1,3, 5 (choose one or two lessons each day)
5. Complete practice book pages 95-118.
6. Complete daily reading log
7. Complete excursions writing assignments in writing journal (in teacher's editions for lessons 19-24)
8. Complete four additional writing assignments in journal: (2 or more sentences each)
  - describe a community helper and what they do (ex. Firefighter etc.)
  - What would you like to do when you grow up?
  - Describe someone important to you
  - Describe a famous person and why they are famous? (a president, sports player, etc.)
9. Complete Wordly Wise lesson 4
10. Practice sight words for So Simple sight words: (make flashcards at home and practice)  
Come, people, because, always, know, she, walk, would, happy, saw ,they, was
12. Complete biography book report and turn in with logs and samples on March 5<sup>th</sup>. (Book report page attached).

**Kindergarten Math assignments**  
**LP4 (January 23rd - March 3rd)**  
**Chapters 10-12**

1. Complete daily calendar worksheets.
2. Complete math story problem in math journal (2-3 per week).
3. Write numbers 51-100 in math journal (once per week).
4. Count aloud from 1-100 and count objects around the house (weekly).
5. Complete activity workbook and textbook pages for chapters 10-12.
6. Work on IXL math online at least 15 minutes per day.





Name: \_\_\_\_\_

# Biography

## Mini-Report

Who is the person you read about?

Give some basic information.

**Who?**

What did they do that made them famous?

**What?**

When did they live?

What was life like during that time?

**When?**

Why should everyone know about this person?

How can it help us?

**Why?**



**Read**

Directions: Read with your child each night. You may read to your child, your child reads to you, or a combination of the two. Be sure to mark which reading strategy you used for the book you read. More than one strategy may be used.

[illegible]

## Reading Strategies

1. Ask and answer questions about a story.
2. Retell a story.
3. Make predictions about a story.
4. Identify characters, setting, and major events in a book.
5. Ask or answer questions about unknown words.
6. Identify the author and illustrator.
7. Identify parts of a book.
8. Sound out words.
9. Identify rhyming words in the story.
10. Identify letters or sight words in the book.
11. Identify punctuation.
12. Read the pictures.

**Read**

- Created by Amanda Dykstra 2014





Learning Period 4 (~~January 24<sup>th</sup> - March 4<sup>th</sup>~~)  
Kindergarten At - Home Math Journal Prompts

1	Draw one set of 7 circles. Draw another set of 10 circles. Circle the one that has more.
2	Find 50 items in your house that are alike. Draw them in your journal
3	You have 10 cookies and 9 cakes. How many cakes and cookies do you have all together?
4	Write the number 25. Now write the number 35. Circle the smaller number.
5	Put the following numbers in order from least to greatest 6, 10, 23, 1, 90, 56, 70
6	Draw 25 circles in your journal. Now draw 2 more. How many do you have now?
7	Solve these problems in your journal: $10-5 = \underline{\quad}$ . $13-6 = \underline{\quad}$
8	Solve the following problems in your journal. $15-3 = \underline{\quad}$ , $10-2 = \underline{\quad}$
9	Write the number 30 in your journal. Now write the number that is 5 less. Now write the number that is 10 more.
10	There were 10 kids playing ball. 4 more kids came to play. Then 5 kids left. How many kids are left playing ball.
11	Write the numbers 20 - 30 in your journal.
12	Which number is bigger 45 or 36? Write it in your journal.
13	Write down numbers 10-25. Which number comes first? Which number comes last?
14	Write the number 50 in your journal. Now write the number that is 10 less than that. Now write the number that is 10 more.
15	You have 14 toy cars. There are 2 wheels on each car. How many wheels are there on both cars? Draw a picture and solve in your journal.

Date \_\_\_\_\_

## Weekly Math Assignment

Write your numbers 1-50 in order below

[illegible]

Name \_\_\_\_\_ Date \_\_\_\_\_

Date \_\_\_\_\_

## Weekly Math Assignment

Write your numbers 1-50 in order below

[illegible]

Name \_\_\_\_\_ Date \_\_\_\_\_

Date \_\_\_\_\_

Write your numbers 1-50 in order below

[illegible]

Name \_\_\_\_\_ Date \_\_\_\_\_

Date \_\_\_\_\_

## Weekly Math Assignment

Write your numbers **150** in order below


51-100

[illegible]

Name \_\_\_\_\_ Date \_\_\_\_\_

Date \_\_\_\_\_

## Weekly Math Assignment

Write your numbers  in order below

5-100

[illegible]


Name \_\_\_\_\_ Date \_\_\_\_\_

Date \_\_\_\_\_

Write your numbers 1-50 in order below

[illegible]





# CALENDAR JOURNAL



MY NAME IS: \_\_\_\_\_

today IS:

Monday	Tuesday	Wednesday	Thursday	Friday
--------	---------	-----------	----------	--------

THIS IS the \_\_\_\_\_ DAY OF the MONTH

Tally Marks:

the MONTH IS:

January	February
March	April
May	June
July	August
September	October
November	December

the Year IS:

2016	2017
------	------

OUR date IN #S:

\_\_\_\_\_ - \_\_\_\_\_ - \_\_\_\_\_




the weather IS: \_\_\_\_\_


WE HAVE BEEN  
IN SCHOOL FOR...

\_\_\_\_\_ days


PLACE VALUE:

\_\_\_\_\_ ones  
 \_\_\_\_\_ tens  
 \_\_\_\_\_ hundreds





# CALENDAR JOURNAL



MY NAME IS: \_\_\_\_\_

today IS:

Monday	Tuesday	Wednesday	Thursday	Friday
--------	---------	-----------	----------	--------

THIS IS THE \_\_\_\_\_ DAY OF THE MONTH

Tally Marks:

the MONTH IS:


January	February
March	April
May	June
July	August
September	October
November	December

the Year IS:

2016	2017
------	------

OUR date IN #S:

\_\_\_\_ - \_\_\_\_ - \_\_\_\_




the weather IS: \_\_\_\_\_

WE HAVE BEEN  
IN SCHOOL FOR...

\_\_\_\_\_ days

PLACE VALUE:

\_\_\_\_\_ ones  
 \_\_\_\_\_ tens  
 \_\_\_\_\_ hundreds



# **CALENDAR JOURNAL**

MY NAME IS: \_\_\_\_\_

today IS:

Monday	Tuesday	Wednesday	Thursday	Friday
--------	---------	-----------	----------	--------

THIS IS THE \_\_\_\_\_ DAY OF THE MONTH

Tally Marks:

the MONTH IS:


January	February
March	April
May	June
July	August
September	October
November	December

the Year IS:

2016	2017
------	------

OUR date IN #S:

\_\_\_\_\_ - \_\_\_\_\_ - \_\_\_\_\_



the weather IS:

WE HAVE BEEN  
IN SCHOOL FOR...

\_\_\_\_\_ days

Place value:

\_\_\_\_\_ ones  
 \_\_\_\_\_ tens  
 \_\_\_\_\_ hundreds

