

Name _____

Informative: List facts about crabs.
Use those facts to write about a
crab.




Fact #1:

Fact #2:

Fact #3:

Name _____

Informative: List facts about flip flops. Use those facts to write about flip flops.




Fact #1:

Fact #2:

Fact #3:

Name _____

Informative: Use facts to write about swimming.



Topic Sentence:

Fact 1:

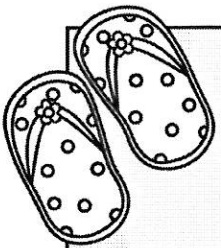
Fact 2:

Fact 3:

Conclusion Sentence:

Name _____


You're headed to the beach. Make a list of all the things you need to remember to bring. Tell why you are bringing each item.



Item


Reason for bringing it

Item	Reason for bringing it




Name _____

What's your favorite summertime food?
Why?




Name _____

Write about a special summer memory.



Name _____

What do you miss most about school during
the summertime?



Name _____



Senses of Summer

Looks like

Tastes like

Sounds like

Feels like

Smells like


ABC's of Summer



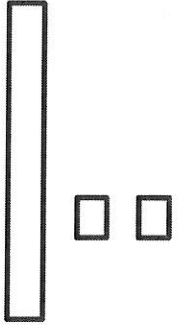
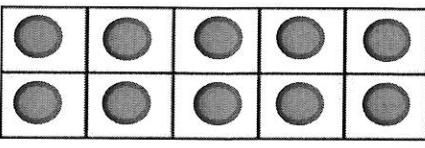
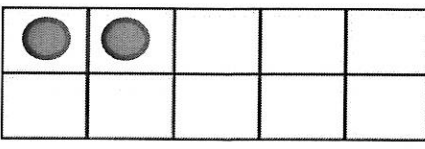



A	_____	N	_____
B	_____	O	_____
C	_____	P	_____
D	_____	Q	_____
E	_____	R	_____
F	_____	S	_____
G	_____	T	_____
H	_____	U	_____
I	_____	V	_____
J	_____	W	_____
K	_____	X	_____
L	_____	Y	_____
M	_____	Z	_____

Name _____





Signs of summer. How do you know summer is here?



Write, Make, Expand, Base 10!

Write	Make	Expand	Base 10
<div style="border: 1px solid black; border-radius: 15px; padding: 20px; text-align: center; font-size: 2em; font-weight: bold;">12</div>		$\begin{array}{l} \underline{1} \text{ tens} \\ \underline{2} \text{ ones} \\ \underline{10} + \underline{2} = \underline{12} \end{array}$	 
<div style="border: 1px solid black; border-radius: 15px; height: 150px; width: 100%;"></div>		$\begin{array}{l} \underline{\quad} \text{ tens} \\ \underline{\quad} \text{ ones} \\ \underline{\quad} + \underline{\quad} = \underline{\quad} \end{array}$	
<div style="border: 1px solid black; border-radius: 15px; height: 150px; width: 100%;"></div>		$\begin{array}{l} \underline{\quad} \text{ tens} \\ \underline{\quad} \text{ ones} \\ \underline{\quad} + \underline{\quad} = \underline{\quad} \end{array}$	
<div style="border: 1px solid black; border-radius: 15px; height: 150px; width: 100%;"></div>		$\begin{array}{l} \underline{\quad} \text{ tens} \\ \underline{\quad} \text{ ones} \\ \underline{\quad} + \underline{\quad} = \underline{\quad} \end{array}$	

Write, Make, Expand, Base 10!

Write	Make	Expand	Base 10																				
		<p>_____tens</p> <p>_____ones</p> <p>_____ + _____ = _____</p>	<table border="1" data-bbox="1112 394 1533 527"> <tr><td></td><td></td><td></td><td></td><td></td></tr> <tr><td></td><td></td><td></td><td></td><td></td></tr> </table> <table border="1" data-bbox="1112 562 1533 695"> <tr><td></td><td></td><td></td><td></td><td></td></tr> <tr><td></td><td></td><td></td><td></td><td></td></tr> </table>																				
		<p>_____tens</p> <p>_____ones</p> <p>_____ + _____ = _____</p>	<table border="1" data-bbox="1112 804 1533 936"> <tr><td></td><td></td><td></td><td></td><td></td></tr> <tr><td></td><td></td><td></td><td></td><td></td></tr> </table> <table border="1" data-bbox="1112 972 1533 1104"> <tr><td></td><td></td><td></td><td></td><td></td></tr> <tr><td></td><td></td><td></td><td></td><td></td></tr> </table>																				
		<p>_____tens</p> <p>_____ones</p> <p>_____ + _____ = _____</p>	<table border="1" data-bbox="1112 1213 1533 1346"> <tr><td></td><td></td><td></td><td></td><td></td></tr> <tr><td></td><td></td><td></td><td></td><td></td></tr> </table> <table border="1" data-bbox="1112 1381 1533 1514"> <tr><td></td><td></td><td></td><td></td><td></td></tr> <tr><td></td><td></td><td></td><td></td><td></td></tr> </table>																				
		<p>_____tens</p> <p>_____ones</p> <p>_____ + _____ = _____</p>	<table border="1" data-bbox="1112 1623 1533 1755"> <tr><td></td><td></td><td></td><td></td><td></td></tr> <tr><td></td><td></td><td></td><td></td><td></td></tr> </table> <table border="1" data-bbox="1112 1791 1533 1923"> <tr><td></td><td></td><td></td><td></td><td></td></tr> <tr><td></td><td></td><td></td><td></td><td></td></tr> </table>																				

More and Less

Roll one die and write the number in the middle box. Fill in the numbers for 10 more, 10 less, 1 more, and 1 less.

Fact Families

Roll the dice and write in the 2 numbers. Add to calculate the 3rd number.
Write the complete fact family.

$$\begin{array}{r} _ + _ = _ \\ _ + _ = _ \\ _ - _ = _ \\ _ - _ = _ \end{array}$$

$$\begin{array}{r} _ + _ = _ \\ _ + _ = _ \\ _ - _ = _ \\ _ - _ = _ \end{array}$$

$$\begin{array}{r} _ + _ = _ \\ _ + _ = _ \\ _ - _ = _ \\ _ - _ = _ \end{array}$$

$$\begin{array}{r} _ + _ = _ \\ _ + _ = _ \\ _ - _ = _ \\ _ - _ = _ \end{array}$$

$$\begin{array}{r} _ + _ = _ \\ _ + _ = _ \\ _ - _ = _ \\ _ - _ = _ \end{array}$$

$$\begin{array}{r} _ + _ = _ \\ _ + _ = _ \\ _ - _ = _ \\ _ - _ = _ \end{array}$$

$$\begin{array}{r} _ + _ = _ \\ _ + _ = _ \\ _ - _ = _ \\ _ - _ = _ \end{array}$$

$$\begin{array}{r} _ + _ = _ \\ _ + _ = _ \\ _ - _ = _ \\ _ - _ = _ \end{array}$$

$$\begin{array}{r} _ + _ = _ \\ _ + _ = _ \\ _ - _ = _ \\ _ - _ = _ \end{array}$$

Subtraction

Roll the dice and write in the the largest number first. Write the correct difference in the box.

\square	\square	\square	\square
$- \square$	$- \square$	$- \square$	$- \square$
<hr/>	<hr/>	<hr/>	<hr/>
\square	\square	\square	\square
\square	\square	\square	\square
$- \square$	$- \square$	$- \square$	$- \square$
<hr/>	<hr/>	<hr/>	<hr/>
\square	\square	\square	\square

Addition



Roll the dice and write in the the 2 numbers. Write the correct sum.

	<input type="text"/>		<input type="text"/>		<input type="text"/>		<input type="text"/>
+	<input type="text"/>	+	<input type="text"/>	+	<input type="text"/>	+	<input type="text"/>
<hr/>							

<input type="text"/>	<input type="text"/>	<input type="text"/>	<input type="text"/>	<input type="text"/>	<input type="text"/>	<input type="text"/>	<input type="text"/>
----------------------	----------------------	----------------------	----------------------	----------------------	----------------------	----------------------	----------------------

	<input type="text"/>		<input type="text"/>		<input type="text"/>		<input type="text"/>
+	<input type="text"/>	+	<input type="text"/>	+	<input type="text"/>	+	<input type="text"/>
<hr/>							





<input type="text"/>	<input type="text"/>	<input type="text"/>	<input type="text"/>	<input type="text"/>	<input type="text"/>	<input type="text"/>	<input type="text"/>
----------------------	----------------------	----------------------	----------------------	----------------------	----------------------	----------------------	----------------------



Greater Than or Less Than

Roll the dice and write in the the 2 numbers. Write in the correct sign
in the circle. < > or =

	○	
	○	
	○	
	○	
	○	
	○	
	○	
	○	



	○	
	○	
	○	
	○	
	○	
	○	
	○	
	○	

SKIP COUNT BY 2s

1		3		5		7		9	
11		13		15		17		19	
21		23		25		27		29	
31		33		35		37		39	
41		43		45		47		49	
51		53		55		57		59	
61		63		65		67		69	
71		73		75		77		79	
81		83		85		87		89	
91		93		95		97		99	
101		103		105		107		109	
111		113		115		117		119	

SKIP COUNT BY 5s

1	2	3	4		6	7	8	9	
11	12	13	14		16	17	18	19	
21	22	23	24		26	27	28	29	
31	32	33	34		36	37	38	39	
41	42	43	44		46	47	48	49	
51	52	53	54		56	57	58	59	
61	62	63	64		66	67	68	69	
71	72	73	74		76	77	78	79	
81	82	83	84		86	87	88	89	
91	92	93	94		96	97	98	99	
101	102	103	104		106	107	108	109	
111	112	113	114		116	117	118	119	

SKIP COUNT BY 10s

1	2	3	4	5	6	7	8	9	
11	12	13	14	15	16	17	18	19	
21	22	23	24	25	26	27	28	29	
31	32	33	34	35	36	37	38	39	
41	42	43	44	45	46	47	48	49	
51	52	53	54	55	56	57	58	59	
61	62	63	64	65	66	67	68	69	
71	72	73	74	75	76	77	78	79	
81	82	83	84	85	86	87	88	89	
91	92	93	94	95	96	97	98	99	
101	102	103	104	105	106	107	108	109	
111	112	113	114	115	116	117	118	119	

120 BOARD

1	2	3	4	5	6	7	8	9	10
11	12	13	14	15	16	17	18	19	20
21	22	23	24	25	26	27	28	29	30
31	32	33	34	35	36	37	38	39	40
41	42	43	44	45	46	47	48	49	50
51	52	53	54	55	56	57	58	59	60
61	62	63	64	65	66	67	68	69	70
71	72	73	74	75	76	77	78	79	80
81	82	83	84	85	86	87	88	89	90
91	92	93	94	95	96	97	98	99	100
101	102	103	104	105	106	107	108	109	110
111	112	113	114	115	116	117	118	119	120